





Name: _____


Class: _____

Stage 1 (Year 2) – Learning From Home – Week 2

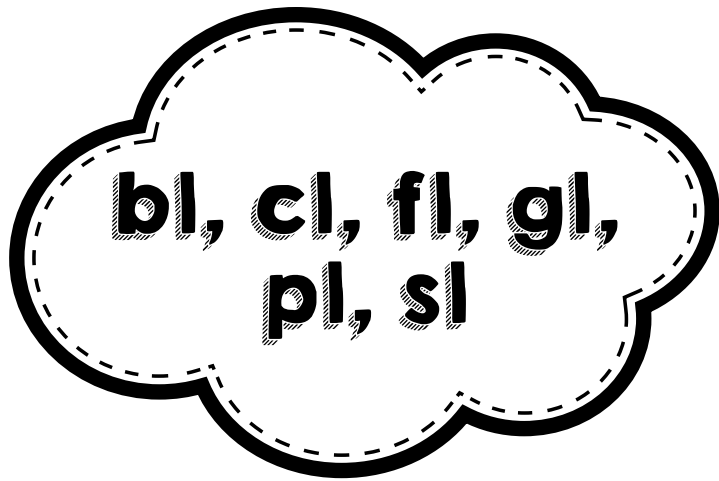
	Monday	Tuesday	Wednesday	Thursday	Friday
Morning	<p><u>Fitness</u> Follow video on hopping: https://vimeo.com/422700861</p> <p>OR</p> <p>Practise hopping. Create an obstacle course with different heights in your backyard and try and hop over them. Complete the course twice - once on each leg. Run on the spot for 30 seconds.</p> <p>Hold a front support, back support and side support for 20 seconds each.</p> <hr/> <p><u>English</u></p>	<p><u>Fitness</u> Follow video on laces kick: https://vimeo.com/417383335</p> <p>OR</p> <p>Balloon chase. Blow up a balloon. Try to keep the balloon up in the air without touching the ground for as long as you can. Alternative: use a large soft ball. Do 30 high knee jumps.</p> <hr/> <p><u>English</u> Reading: Read and complete the cloze</p>	<p><u>Fitness</u> Follow video on foot skills and dribbling: https://vimeo.com/427909020</p> <p>OR</p> <p>Practise hopping. Hop like a: <ul style="list-style-type: none"> - frog to a lily pad - kangaroo over rocks - rabbit in a zigzag direction out of the bushes - horse that gallops to a river then leaps over it </p> <hr/> <p><u>English</u></p>	<p><u>Fitness</u> Follow video bouncing and dribbling: https://vimeo.com/418788433</p> <p>OR</p> <p>Practise skipping with rope. How many times can you skip without stopping? Plank for 30 seconds.</p> <hr/> <p><u>English</u> Reading: Record 1 minute of yourself reading a book of your choice for 10-15 minutes. Spelling: Complete</p>	<p><u>Fitness</u> Follow video on dancing: https://vimeo.com/443891986</p> <p>OR</p> <p>Choose one of your favourite songs and have a dance party. Do 10 star jumps.</p> <hr/> <p><u>English</u> Reading: Read the story <i>The Perfect Present</i>. Answer the comprehension questions. Remember, you may want to read the story more than once to help.</p>

<p>Reading: Record 1 minute of yourself reading a book of your choice for 10-15 minutes.</p> <p>Spelling: Read through the spelling words with the focus of blends: <i>bl, cl, fl, gl, pl, sl</i>. Practise writing them in Monday's column. Check after you are done.</p> <p>Brainstorm other words that may contain <i>bl, cl, fl, gl, pl, or sl</i>.</p> <p>Choose 2 activities to complete from the spelling grid.</p> <p>Speaking: Plan and compose a short 2 min speech about your favourite place to visit. Make sure you include lots of detail, covering who, what, when, where, why and how. Record a video of yourself speaking about your favourite place to visit. Remember you should include details about where is the exact location (state, country), what there is to do, and reasons why</p>	<p>passage on <i>Winter</i>.</p> <p>Spelling: Complete Tuesday's column by writing all the vowels and consonants in different colours (except for yellow).</p> <p>Choose another 2 activities to complete from the spelling grid.</p> <p>Writing: Would you rather be invisible or be able to fly? Provide detailed reasons why.</p>	<p>Reading: Record 1 minute of yourself reading a book of your choice for 10-15 minutes.</p> <p>Grammar: Have a think about different words that can be used instead of 'big'. Words that have similar meaning are called <i>synonyms</i>. Watch the video on synonyms. https://youtu.be/X4EhMDpeHyc Google search: smile and learn synonyms</p> <p>Complete worksheet on synonyms by writing a word that has similar meaning that is underlined. Challenge: Can you think of any other synonyms?</p> <p>Editing: Complete editing passage cards 3 and 4 - <i>Mary's Birthday Party</i> and <i>King Kong and Fred the Frog</i>. Rewrite the sentences without any mistakes. Use the checklist underneath to see if you have found all of the mistakes.</p> <p>Spelling: Complete</p>	<p>Thursday's column by asking someone to give you a pre-test. They may like to challenge you and mix up all of the words.</p> <p>Choose another 2 activities to complete from the spelling grid.</p> <p>Handwriting: Complete the handwriting sheet. Start by tracing over the letters then re-write them on your own on the lines underneath. Make sure you look at the lines and form your letters using the correct formation. Don't forget to complete the last sentence.</p>	<p>Practise grammar based on <i>The Perfect Present</i>.</p> <p>Spelling: Complete Friday's column by asking someone to read out the words to you to see if you remember how to spell them.</p> <p>Choose another 2 activities to complete from the spelling grid.</p> <p>Writing: Should kids be allowed to eat whatever they want? Provide detailed reasons why.</p>
---	--	---	---	--

	it is your favourite place.		Wednesday's column by writing down how many syllables each word has. Choose another 2 activities to complete from the spelling grid.		
Break	Break	Break	Break	Break	Break
Middle	<p align="center">Mathematics</p> <p>Maths mentals: Try and do this without any help. Remember to check over your answers.</p> <p>Place value: Friends of 20. https://www.youtube.com/watch?v=V9ZNVN7PedY YouTube search: numberblocks many faces of 20</p> <p>QR code for video: </p> <p>Complete 'Addition Sleuth to 20' worksheet.</p> <p>Complete 'Addition Word Problems' by showing all mathematical thinking.</p>	<p align="center">Mathematics</p> <p>Maths mentals: Try and do this without any help. Remember to check over your answers.</p> <p>Place value: 3-digit numbers. https://www.youtube.com/watch?v=3mRLSXT-dxo&ab_channel=ElementaryMathwithMr.J YouTube search: math with mr j place value with 3-digit</p> <p>QR code for video: </p> <p>Complete 'Numbers from 1000' and 'Numbers before 1000' worksheets.</p>	<p align="center">Mathematics</p> <p>Maths mentals: Try and do this without any help. Remember to check over your answers.</p> <p>Calendar: Why is it valuable to have a calendar? What are the features of a calendar? What information does it provide?</p> <p>Watch video: https://youtu.be/ILCRuXriKMU YouTube search: using a calendar usatestprep</p> <p>QR code for video: </p> <p>Complete the calendar for July and answer the</p>	<p align="center">Mathematics</p> <p>Maths mentals: Try and do this without any help. Remember to check over your answers.</p> <p>Position: What are some positional language we could use? Why is it important to know these words? Watch video: https://youtu.be/HnIjzWhsNnw YouTube search: scratch garden location and directions</p> <p>QR code for video: </p> <p>It is essential to follow the correct instructions.</p>	<p align="center">Mathematics</p> <p>Maths mentals: Try and do this without any help. Remember to check over your answers.</p> <p>Graphs: Explore your backyard or front yard to collect some data about what can be found. Complete worksheet on outdoor graphs by collecting data then creating a graph. Interpret the data collected underneath. Optional: what additional questions would you create?</p>

			questions below.	Complete and follow the colouring direction activity. You may like to ask someone to read out the instructions for you. Challenge: Design your own activity for a friend to complete.	
Break	Break	Break	Break	Break	Break
Afternoon	<p>Science and Technology</p> <p>Think about the moon - is it always in the same shape every week? These shapes are called phases.</p> <p>Watch the video about the different moon phases: https://www.youtube.com/watch?v=yXe0yxzYkjo&ab_channel=SciShowKids YouTube search: why does the moon change scishowkids</p> <p>QR code for video:</p>  <p>Complete activity by drawing and labelling the</p>	<p>PDHPE</p> <p>Think about what you are good at. These are known as your <i>personal strengths</i>. Complete the activity by writing 5 amazing things about yourself.</p> <p>There are also some things that we may not be good at, but would like to get better at. Complete the table by listing more things that you are good at, and some things you would like to improve on. Think of the power of yet!</p>	<p>Creative Arts - Drama</p> <p><u>Say it another way</u> Say the nursery rhyme of Humpty Dumpty as if you are:</p> <ul style="list-style-type: none"> • in a hurry • feeling very tired • a toddler • feeling very excited for something • a superhero • a police officer • telling someone a secret <p><u>Mime</u> Thinking about how you might move, body language, facial expressions and what you are doing, pretend to be:</p> <ul style="list-style-type: none"> • a weather presenter • an angry car driver • a bored child 	<p>Geography</p> <p>Maps are vital in assisting us with locating where different places are. Design your own neighbourhood using the template provided.</p>	<p>Catch up session for all incomplete tasks</p>

	different phases of the moon.		<ul style="list-style-type: none">• a thief• doing housework• someone trying to get out of bed• someone taking a strong dog for a walk		
--	-------------------------------	--	---	--	--



**bl, cl, fl, gl,
pl, sl**

Spelling Words

1. block
2. clock
3. flag
4. glass
5. plant
6. slide
7. plum
8. fly
9. glove
10. sleep

Extension

1. clown
2. flower
3. please
4. blanket
5. planet

Activity Grid

Sort your spelling words into their blend groups (bl,cl,fl,gl,pl,sl).	Write out each of your spelling words in rainbow colours.
Using a container of water and a paintbrush, paint each of your spelling words on some concrete.	Search through books to find your spelling words. Use tally marks to record how many times you find each word.
Jumble up the letters of your spelling words. Give them to a partner to unjumble.	Write as many words as you can that rhyme with each of your spelling words.
Use glue to write out each spelling word. Sprinkle glitter over the glue.	Write out your spelling words and draw matching pictures on flash cards. Play a game of memory or snap with a partner.
Write out each of your spelling words using dots.	Use chalk to write out your spelling words on concrete.

Monday

1. $2 + 36 =$ _____

2. $73 - 8 =$ _____

3. $69 + 34 =$ _____

4. $20 \div 10 =$ _____

5. $2 \div 2 =$ _____

6. Write these numbers in order from largest to smallest:

1773, 3476, 7945, 449. _____

7. Complete this counting pattern:

66, 69, 72, 75, _____, _____, _____

8. Take 18 away from 33: _____


9. Divide 15 by 5. _____

10. $\$2.00 + 50 \text{ cents} + 10 \text{ cents} =$ _____

11. Colour in a third of these stars.



12. Colour in a quarter of these circles.




13. How many weeks in a fortnight? _____

14. A triangular-based prism has _____ corners.



15. Which circle has the lowest chance of being selected? Black or white? _____



Tuesday

1. $55 - 9 =$ _____

2. $17 + 96 =$ _____

3. $75 - 4 =$ _____

4. $38 \div 2 =$ _____

5. $21 \div 3 =$ _____

6. $246 =$ _____ hundreds, _____ tens, _____ ones.

7. Complete this counting pattern:


85, 90, 95, 100, _____, _____, _____

8. What is the sum of 2, 4 and 5? _____


9. Divide 27 by 3. _____

10. $10 \text{ cents} + 50 \text{ cents} + 5 \text{ cents} =$ _____

11. Colour in a third of these circles.



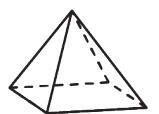
12. Colour in a quarter of these triangles.



13. What digital time does the clock show?



14. How many faces does a square-based pyramid have? _____



15. Which star has the highest chance of being selected? Black or white? _____



Wednesday

1. $66 + 34 = \underline{\quad}$

2. $29 - 2 = \underline{\quad}$

3. $47 + 10 = \underline{\quad}$

4. $15 \div 5 = \underline{\quad}$

5. $40 \div 5 = \underline{\quad}$

6. What is the value of the number in the thousands place in 6384? $\underline{\quad}$

7. Complete this counting pattern:


0, 10, 20, 30, $\underline{\quad}$, $\underline{\quad}$, $\underline{\quad}$

8. In a group of 83 students, 10 would like to play tennis and the rest want to play rugby union. How many want to play rugby union? $\underline{\quad}$

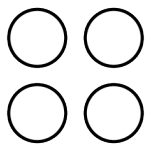
9. Divide 40 by 10. $\underline{\quad}$

10. 50 cents + \$2.00 = $\underline{\quad}$

11. Colour in a quarter of this shape:



12. Colour in a quarter of these circles.



13. 1 day = $\underline{\quad}$ hours

14. A square-based pyramid has $\underline{\quad}$ corners.



15. Which star has the lowest chance of being selected? Black or white? $\underline{\quad}$



Thursday

1. $58 + 30 = \underline{\quad}$

2. $35 - 7 = \underline{\quad}$

3. $36 + 11 = \underline{\quad}$

4. $62 \div 2 = \underline{\quad}$

5. $20 \div 5 = \underline{\quad}$

6. Write these numbers in order from smallest to largest: 256, 4099, 9594, 7849. $\underline{\quad}$

7. Complete this counting pattern:

82, 87, 92, 97, $\underline{\quad}$, $\underline{\quad}$, $\underline{\quad}$

8. Alexander had 75 crayons and was given 86 more crayons. How many crayons does Alexander now have? $\underline{\quad}$

9. Share \$6 between 3 children. $\underline{\quad}$

10. \$1.00 + 10 cents + 20 cents = $\underline{\quad}$

11. Colour in a quarter of these stars.

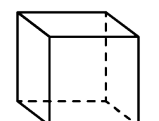


12. Colour in an eighth of these triangles.



13. How many seconds in a minute? $\underline{\quad}$

14. What is the name of this 3D object? $\underline{\quad}$



15. Which star has the highest chance of being selected? Black or white? $\underline{\quad}$



Friday

1. $35 - 9 =$ _____

2. $38 + 69 =$ _____

3. $46 - 8 =$ _____

4. $40 \div 10 =$ _____

5. $54 \div 2 =$ _____

6. What is the value of the number in the thousands place in 6792? _____

7. Complete this counting pattern:


11, 16, 21, 26, _____, _____, _____

8. What does 48 plus 71 equal? _____


9. Share 96 oranges between 2 children. _____

10. 5 cents + 10 cents = _____

11. Colour in a third of these circles.

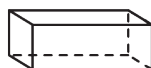


12. Colour in an eighth of these triangles.




13. 1 fortnight = _____ days

14. What is the name of this 3D object?



15. Which circle has the highest chance of being selected? Black or white? _____



Addition sum sleuth



Can you find 20 ways



to make

18



4	9	9	5	11	8	10	5
1	12	8	13	2	17	2	1
17	5	6	18	14	15	11	16
0	2	15	10	8	9	3	5
8	4	12	7	4	3	14	18
9	6	14	16	12	7	11	0
9	3	1	13	2	15	2	6
16	11	9	0	18	9	13	7
10	4	7	13	17	1	16	5
3	15	17	14	4	0	6	12

Addition sum sleuth



Can you find 20 ways



to make **19**



12	15	7	8	17	1	2	6
3	16	4	11	6	4	17	14
10	12	18	9	12	19	8	5
2	9	8	15	13	7	4	16
14	3	0	19	17	11	10	6
7	12	15	18	1	5	8	13
3	10	0	11	4	15	1	9
0	13	6	7	19	8	16	3
1	16	2	9	10	0	5	18
5	18	14	11	17	2	13	14

Addition sum sleuth



Can you find 20 ways



to make

20




4	5	13	7	14	2	11	1
9	16	11	19	10	18	12	15
12	8	20	2	1	9	11	5
6	13	4	7	3	16	7	0
1	19	18	5	13	15	2	6
8	0	13	14	17	18	17	14
10	16	5	2	6	8	3	5
10	9	15	1	17	0	14	16
6	17	4	8	11	15	20	4
3	12	19	12	10	9	3	7

Josh had 6 toy trucks and was given 6 more for his birthday. How many toy trucks does he have now?




Millie was growing corn in her garden. She picked 23 cobs of corn, but 13 were rotten and had to be thrown away. How many cobs of corn did she have to eat?



Debbie was baking cupcakes for the fete. On Saturday she baked 10 cupcakes, on Sunday she baked 5 cupcakes and on Monday she baked 2 cupcakes. How many cupcakes did she bake altogether?



Phases of the Moon



Winter

Read the sentences and fill in the gaps with the correct words from the word bank below.

Winter is one of the four _____. It is the season that comes after autumn, beginning in June and finishing in _____. This is when we have the coldest _____ and some parts of Australia receive sleet, _____ and snow. Winter is when we experience the longest nights, which means more darkness, _____ days and the least amount of _____.

What happens to the animals in winter?

Many animals _____ during autumn and winter, including some possums, bats, echidnas, frogs and bees. Some animals, like _____, _____ somewhere _____ for the winter. Other animals come to Australia from the South Pole to escape the cold _____ winter, including whales and _____. Many animals grow _____ fur to stay warm, like _____.


What happens to our health in winter?

During the winter, many people suffer from _____ and the flu. _____ that some people suffer can include a runny nose, a cough or a headache.

Word Bank


seasons	shorter	warmer	thicker
August	daylight	honeyeaters	kangaroos
weather	hibernate	Antartic	colds
hail	migrate	penguins	symptoms

Numbers from 1000




1193

Four empty circles for writing numbers.




2987

Four empty circles for writing numbers.




4499

Four empty circles for writing numbers.




6998

Four empty circles for writing numbers.



8062

Four empty circles for writing numbers.



9501

Four empty circles for writing numbers.

Numbers before 1000



Four large circles, a smaller circle containing the number 103, and an illustration of a girl with a pacifier.

Four large circles, a smaller circle containing the number 241, and an illustration of a girl holding a bottle.


Four large circles, a smaller circle containing the number 576, and an illustration of a boy with a pacifier.

Four large circles, a smaller circle containing the number 601, and an illustration of a girl holding a bottle.

Four large circles, a smaller circle containing the number 876, and an illustration of a rattle.

Four large circles, a smaller circle containing the number 999, and an illustration of a baby bottle with a girl's face on it.


Personal Strengths



Think about how you would describe yourself to someone new.

List 5 amazing things about yourself!





Personal Strengths

List or draw things you are good at and things you would like to get better at.

My Strengths

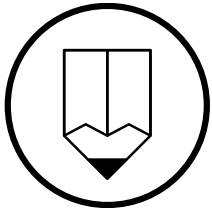
I am good at...

I would like to get better at...

--	--

3 **Mary's Birthday Party**

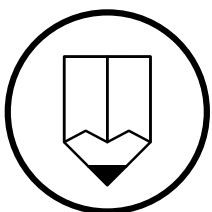
jane and i went to a birfday party on Saturday. It was held at Splash Waterpark. we all bought an ice creme



Find 2 spelling mistakes.
Add 3 capital letters and 1 full stop.

4 **King Kong and Fred the Frog**

king Kong has a pet frogg. The name of his frog is Fred. king Kong and Fred live in a castle calld Ruby Castle



Find 2 spelling mistakes.
Add 2 capital letters and 1 full stop.

Name: _____

synonym sentences

Write the synonyms next to their matching sentence.

sick	small	big	exam	gift
afraid	untidy	loud	sad	stinky

_____ I gave my friend a present.

_____ His room was very messy.

_____ A large dog barked loudly.

_____ I'm at home because I am ill.

_____ Max was unhappy so he cried.

_____ The test was very easy.

_____ My baby sister is very noisy.

_____ My socks are really smelly.

_____ The little boy likes to play.

_____ I am scared of the dark.

July 2021

Sunday	Monday	Tuesday	Wednesday	Thursday	Friday	Saturday

1. Number each day in July.
2. How many days are in July? _____
3. What is the first day of the month?


4. What day of the week does the 18th fall on?

5. How many Thursdays are in July? _____
6. What number day of the month is the 3rd Saturday? _____
7. Add in any special events or days in July.

The day you were born is

called your birthday. You may

get presents and a cake!



My birthday is

Beach



Listen & Draw

Instructions:

1. Draw wave under the surfboard.
2. Draw a bucket in between the umbrella and sandcastle.
3. Draw a spade to the left of the sun.
4. Draw a towel to the right of the palm tree.
5. Draw a fish above the shell.
6. Draw a crab in the middle of the sun, shell, surfboard and palm tree.

Beach

Listen and Draw Activity



Space


Listen & Draw

Instructions:

1. Draw the moon next to the right of the UFO.
2. Draw the Sun above the star.
3. Draw planet to the left of the astronaut.
4. Draw a shuttle in between the rocket and asteroids.
5. Draw an alien next to the shooting star.

Space

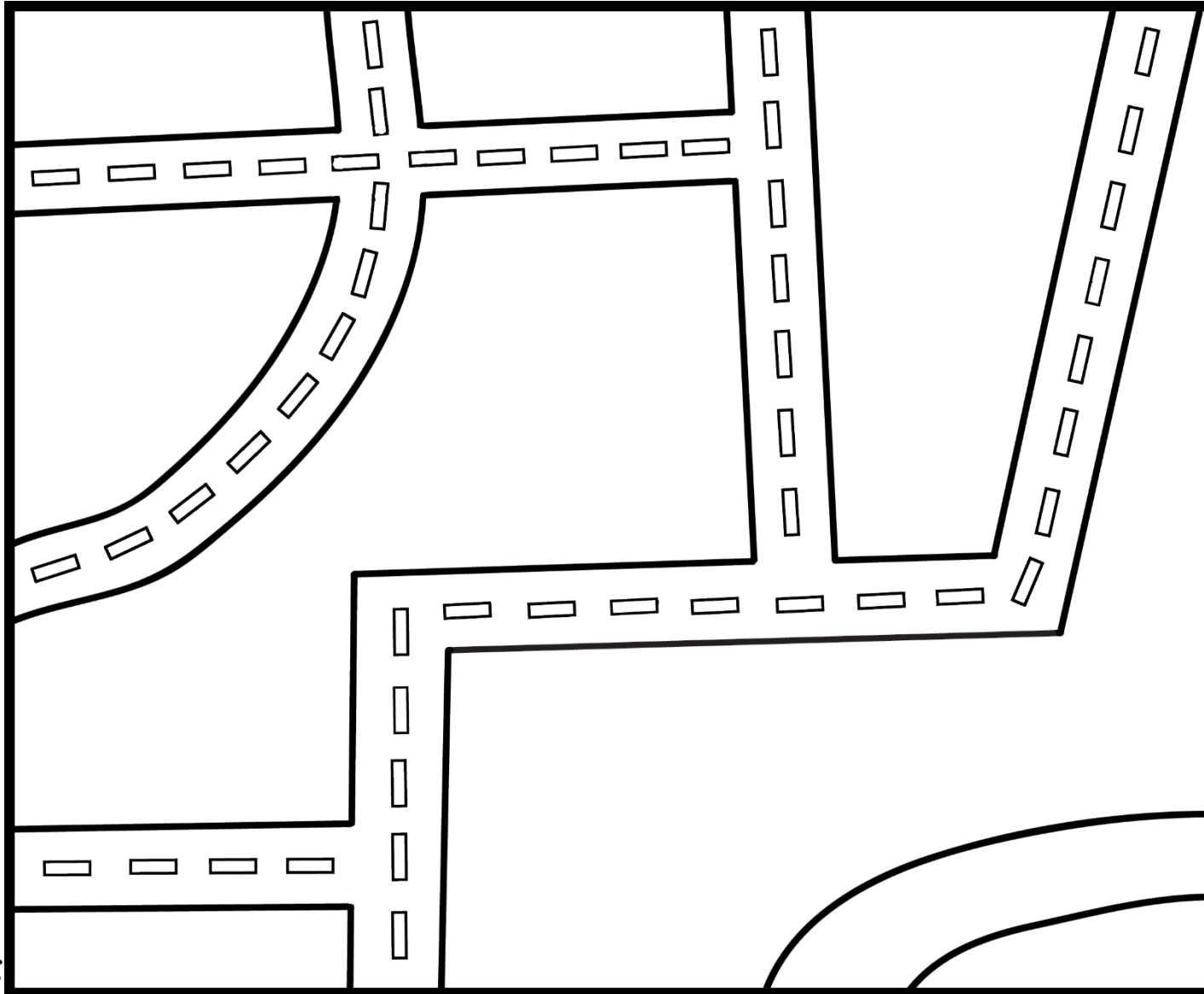
Listen and Draw Activity




DESIGN YOUR OWN NEIGHBOURHOOD

Create symbols to represent the different features in your neighbourhood.

Draw them on your map and fill in the Key.



Key















Name: _____

Date: _____

The Perfect Present



On Sunday it was Dad's birthday so, on Saturday Mum and I went shopping to buy him a present!

First, we went to the gardening shop. My dad loves to garden! We looked at plants and gardening tools, but my Dad already had all of these.

Next, we went to a kitchen shop. My dad loves to cook! We looked at pots and pans and things he could use for cooking, but my dad already had all of these.

I was starting to think we would never find a gift for my Dad, when we saw a photo shop!

Mum and I went inside. We picked our favourite photo on her phone and sent it to the lady. Then we picked a nice big frame for our photo to go in.

On Sunday, Dad unwrapped his present with a big smile. "This is the perfect present!" he said.

1. Whose birthday was it?

2. When was the birthday?

3. What stores did they look in?

4. What do you think Dad's hobbies are?

5. Why didn't they find anything in the first 2 shops?

6. What present did they buy?

7. Did Dad like the present? What words tell you so?

8. What would be the perfect present for your dad? (Or Mum). Why would they like this?

9. What would be the perfect present for you? Why?

In the picture, draw what you think the photo in the frame was!

Student answers comprehension questions based on

Directly stated information within the text - (Literal) Q. 1, 2, 3, 5, 6,

Inferring - Q: 4, 7

Connecting - Q: 8, 9

LANGUAGE AND GRAMMAR

The Perfect Present

1. Find a sentence in the story that ends with an !

2. Find the 2 days of the week that are in the story:

3. Find the **contraction** in the story that has been used instead of

Could not _____

4. Fill in these sentences from the story:

Finally _____ !

“ _____ ” he said.

5. Highlight the **verbs**:

shopping Dad present photo
 print nice picked
 gold chose went unwrapped

6. Put these **verbs** into the correct box:

shopping shopped shopping

buying bought buy

Future	Present	Past

Collect,

tally + graph

top-teacher



Head outside and collect some sticks, leaves, flowers and rubbish.

TALLY IT



TOTAL



Use tally marks to show the amount of each item you found.

Sticks		
Leaves		
Flowers		
Rubbish		

GRAPH IT



Colour in the boxes to show the amount of each item you found.

Sticks															
Leaves															
Flowers															
Rubbish															

What item did you find the most of? _____

What item did you find the least of? _____

Why should we put rubbish into the bin? _____
