





St Johns Park Public School Year 4 (Term 3 Week 9 - 2021)

	Monday	Tuesday	Wednesday	Thursday	Friday
Morning	<p><u>Fitness</u></p> <ul style="list-style-type: none"> 15 star jump 15 squats 15 mountain climbers <p>Repeat these steps 3 times.</p> <p><u>Education LIVE</u> Tune in to Education LIVE at 10am for the live stream.</p> <p>https://education.nsw.gov.au/teaching-and-learning/learning-from-home/learning-at-home</p>	<p><u>Fitness</u></p> <p>Watch the music video: https://www.youtube.com/watch?v=09qk0IXTf4 and learn the song and dance.</p> <p><u>Education LIVE</u> Tune in to Education LIVE at 10am for the live stream.</p> <p>https://education.nsw.gov.au/teaching-and-learning/learning-from-home/learning-at-home</p>	<p><u>Fitness</u></p> <p>Watch the following video: https://bit.ly/3sigNBf</p> <p><u>Education LIVE</u> Tune in to Education LIVE at 10am for the live stream.</p> <p>https://education.nsw.gov.au/teaching-and-learning/learning-from-home/learning-at-home</p>	<p><u>Fitness</u></p> <p>Watch the music video: https://www.youtube.com/watch?v=09qk0IXTf4 and learn the song and dance.</p> <p><u>Education LIVE</u> Tune in to Education LIVE at 10am for the live stream.</p> <p>https://education.nsw.gov.au/teaching-and-learning/learning-from-home/learning-at-home</p>	<p><u>Fitness</u></p> <p>Watch the Aerobics video: https://bit.ly/3slll8X</p> <p><u>Education LIVE</u> Tune in to Education LIVE at 10am for the live stream.</p> <p>https://education.nsw.gov.au/teaching-and-learning/learning-from-home/learning-at-home</p>
	<p><u>English</u></p> <p><u>Reading and Viewing</u> Read and annotate '1788 First apple trees in Tasmania' text provided.</p> <p>Highlighted main points from this text into specific dates/events. You will later use these main points to create a timeline.</p> <p>Answer the following questions:</p>	<p><u>English</u></p> <p><u>Reading and Viewing</u> Read and annotate '1879 First Greek fish and chip shop' text provided.</p> <p>Answer the following questions:</p> <ol style="list-style-type: none"> 1. What led Athanasio Comino to start a business? 2. Why do you think fish and chips was popular in Britain in the 1860s? 3. Who were the first few 	<p><u>English</u></p> <p><u>Reading and Viewing</u> Read and annotate '1907 Peters Ice Cream Founded' text provided.</p> <p>Answer the following questions:</p> <ol style="list-style-type: none"> 1. How did Fred Peters come up with this idea to sell ice cream? 2. What was the world's largest ice cream factory in 2014? 	<p><u>English</u></p> <p><u>Reading and Viewing</u> Read and annotate '2020 Fast food consumption rises during Pandemic' text provided.</p> <p>Answer the following questions:</p> <ol style="list-style-type: none"> 1. Which groups of people are considered Millennials and Generation Z? 	<p><u>English</u></p> <p><u>Reading and Viewing</u> Read and annotate 'The Case of the Missing Poodle' and answer the questions using full sentences.</p> <p><u>Writing & Representing</u> Your pet is missing. Create a missing poster about your pet. Remember to include all the contact details and a</p>

	<p>1. What is the purpose of the text?</p> <p>2. What was the name of William Bligh's ship?</p> <p>3. How many apple trees were planted by Bligh?</p> <p>4. When Bligh returned to Adventure Bay, what did he notice and record in his log?</p> <p>5. Why was he deposed by the New South Wales Corps in 1808.</p> <p>Speaking and Listening Look at the picture of Bligh's ship. What two 'Wonder' questions would you ask? Record and upload in Seesaw. Eg I wonder....</p> <p>Writing & Representing Using notes from reading lesson, create a timeline on 'Bligh's Adventure'. You can create a timeline on paper, an app or online program.</p> <p>Reading Eggs </p> <p>Sign in to Reading Eggs and complete an activity of your choice.</p>	<p>people that opened a fish and chip shop?</p> <p>4. What did Athanassio Comino do once his business became successful?</p> <p>5. What happened to Athanassio's business after he passed away?</p> <p>Writing & Representing Imagine you are Athanassio Comino. Write a journal of your experiences when opening this business. Make sure you include pictures, key words and descriptive language.</p> <p>Sport Go outside and play a sport of your choice for at least 15-20 minutes</p> <p>Reading Eggs </p> <p>Sign in to Reading Eggs and complete an activity of your choice.</p>	<p>3. What does it mean to be a 'shareholder in each of the companies'?</p> <p>4. What happened to Fred's business after he passed away?</p> <p>5. Explain how you think Fred Peters went with his business. Was it easy for him to run a business?</p> <p>Writing & Representing Create a poster advertising Peters in 1927. Keep in mind the colours used, pictures, words and slogan.</p> <p>R U OK? Watch, 'It's OK!' music video - https://bit.ly/2WaU7ay</p> <p>Concentrate on the words and actions. Blue uses to describe how he is feeling. What do his friends do to make him feel better?</p> <p>Reading Eggs </p> <p>Sign in to Reading Eggs and complete an activity of your choice.</p>	<p>2. What was the cause of the significant growth of fast-food consumption?</p> <p>3. List different food-ordering services companies.</p> <p>4. Why do you think Ibis World expected the fast-food market to decline in 2021?</p> <p>5. Why did the author say "Although these apps are popular, they are not the whole story"?</p> <p>Writing & Representing Write a paragraph persuading your teacher why your favourite fast-food is the best. Remember to include a title.</p> <p>Speaking and Listening Create a video advertisement of your favourite fast food.</p> <p>Reading Eggs </p> <p>Sign in to Reading Eggs and complete an activity of your choice.</p>	<p>picture of your pet. Also any reward for finding your pet.</p> <p>YEAR 4 Grade Zoom 11.00-12.00pm A zoom link will be sent to you in Seesaw from your teacher.</p> <p>Reading Eggs </p> <p>Sign in to Reading Eggs and complete an activity of your choice.</p>	Break
Break						Break

<p>Middle</p>	<p>Mathematics Mentals Complete Maths Mentals (15 questions)</p> <p>This year the Healthy Kids Association is promoting Fruit & Veg Month on 23rd August - 17th September.</p> <p>Mass (MA-12MG) Complete 'How much is a basket of fruit and veg?' Worksheet and go on the following link: https://www.woolworths.com.au/shop/browse/fruit-veg</p> 	<p>Mathematics Mentals Complete Maths Mentals (15 questions)</p> <p>Patterns & Algebra (MA2-8NA) Watch the video on https://bit.ly/3yaH85B Complete 'Squared Numbers Fortune Teller' Worksheets</p> <p>Seesaw activity Complete assigned Seesaw activity 'Understanding Squared Numbers'</p> 	<p>Mathematics Mentals Complete Maths Mentals (15 questions)</p> <p>Position (MA2-17MG) Watch the video on https://bit.ly/3i62mxa Complete 'Compass Points' Worksheet</p> <p>Problem solving 1. Eight small bricks have the same mass as three large bricks. The mass of one small brick is 1.5kg. What is the mass of one large brick? 2. A stack of 40 identical toy boxes is 1000cm tall. Marcus takes three boxes off the top of the pile. How tall is the stack now?</p>	<p>Mathematics Mentals Complete Maths Mentals (15 questions)</p> <p>Position (MA2-17MG) Watch the video on https://bit.ly/2UF0i5L Design your own bedroom map using the 'Map of My Bedroom' worksheet. Include a key, 3 coordinate questions and answers about your house. E.g. What is located on (D,4)?</p>	<p>Mathematics Mentals Complete Maths Mentals (15 questions)</p> <p>Maths Strategy Poster Design a Maths poster using a paper or Apps that will help your classmates understand a tricky maths idea. Hint: Include pictures and a step-by-step example that explains your strategy. Take a photo and record yourself explaining your poster in Seesaw.</p>
<p>Break</p>	<p>Break</p>	<p>Break</p>	<p>Break</p>	<p>Break</p>	<p>Break</p>

Afternoon	<p><u>PDHPE</u></p> <p>Topic: 'Cybersmart Forever'</p> <p>Watch the video posted in Seesaw.</p> <p>Do Activity 1 and 2 in your notebook. Post them in Seesaw.</p> <p><u>Sport</u></p> <p>Go outside and play a sport of your choice for at least 20-30 minutes.</p>	<p><u>BTN</u></p> <p>Watch 'Behind the News' on ABC Me.</p> <p>https://www.abc.net.au/btn/classroom/</p> <p>Choose your favourite story. Write a summary of the story. In your summary include 4-6 interesting facts</p> <p><u>Creative Arts – Dance</u></p> <p>Watch and follow the video by clicking on the 'Footsteps' link below:</p> <p>https://vimeo.com/580679217/6fe89c8486</p>	<p><u>Science and Technology</u></p> <p>Topic: 'Forces Near and Far: 'STEM Project' (ST2-9PW)</p> <p>Watch the pre-recorded lesson 'Week 9 Science-STEM' uploaded to SeeSaw or by clicking on the link:</p> <p>https://youtu.be/eIZCEeuzS3c</p>  <p>Complete the worksheet 'Week 9 Science- STEM' and the investigation as you are watching the lesson.</p>	<p><u>Geography</u></p> <p>Topic: 'Significance of Environments' (GE2-1)</p> <p>Watch the 'Survivor' video.</p> <p>Inquisitive - Enjoy teaching Science, History and Geography</p>  <p>Complete the worksheet 'People Rely on the Natural Environment to Survive'</p>	<p><u>Visual Arts</u></p> <p>Watch the video https://www.youtube.com/watch?v=Yq77J0yiTOg&ab_channel=SaraGutkind.</p> <p>Complete your plan using the 'Arcimboldo Inspired Fruit and Vegetable Faces' worksheet.</p> <p>Use paper, coloured pencils, textas and different materials to create your own Arcimboldo inspired fruit and vegetable face.</p>
-----------	--	--	---	--	---

1788 First apple trees in Tasmania



Replica of Bligh's ship, HMS Bounty

Early explorers did not hesitate to introduce familiar plants to the places they visited. In 1788, [William Bligh](#) anchored the *Bounty* in Adventure Bay off what is now Bruny Island. In addition to loading wood and water, Bligh planted seven apple trees, the first apple trees in what would come to be known as the “apple isle”.

It was not unusual for seamen to plant food crops or introduce animals to new lands encountered on their voyages. The aim was to provide food for visiting ships in the future. Returning to the same spot in Adventure Bay in 1792 as captain of the *Providence*, Bligh and the ship's botanists planted cress, celery, acorns and various fruit trees.

Bligh had visited Van Diemen's Land in 1777 when he was a navigation officer on Captain James Cook's *Resolution*. He returned to the island in the *Bounty* in 1788 on a voyage that had been intended to transport breadfruit from Tahiti to the West Indies. The ship had called at the Cape of Good Hope in Africa and the apple trees planted were most likely acquired there.

Bligh's visit on the *Bounty* occurred on the voyage which ended in the famous mutiny. He navigated a longboat to Timor and continued his naval service.

Four years later Bligh returned to Adventure Bay, again on his way to Tahiti. He recorded in [his log](#) that one of the first apple trees that he had planted had survived. The others had been destroyed by fire. He described the fruit of the surviving tree as green and slightly bitter.

Bligh became Governor of New South Wales in 1806. However, he seemed to attract mutiny and was deposed by the New South Wales Corps in 1808.

Monday

1. $91 + 92 =$ _____

2. $67 - 4 =$ _____

3. $16 + 19 =$ _____

4. $66 \div 2 =$ _____

5. $11 \times 9 =$ _____

6. Is 186 an odd or even number? _____

7. Complete this counting pattern:

64, 69, 74, 79, _____, _____, _____

8. In a group of 130 students, 32 would like to play golf and the rest want to play tennis. How many want to play tennis? _____

9. Share \$28 between 4 children. _____

10. 50 cents + \$1.00 + 50 cents = _____

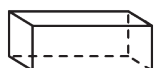
11. \$2.00 + 5 cents + \$1.00 = _____

12. If it was 5:19 in the afternoon, would you write am or pm? _____

13. What digital time does the clock show?



14. How many faces does a rectangular prism have? _____



15. Which star has the lowest chance of being selected? Black or white? _____



Tuesday

1. $41 + 65 =$ _____

2. $64 - 5 =$ _____

3. $88 - 3 =$ _____

4. $12 \times 5 =$ _____

5. $10 \div 5 =$ _____

6. Write these numbers in descending order: 9880, 3111, 6416, 7483, 1085, 1630.

7. Complete this counting pattern:

85, 89, 93, 97, _____, _____, _____

8. 5 minus 3 equals: _____

9. Share \$42 between 6 children. _____

10. \$1.00 + \$2.00 + \$1.00 = _____

11. 20 cents + 5 cents + 50 cents = _____

12. 9 hours = _____ minutes

13. How many weeks is 28 days? _____

14. How many faces does a square-based pyramid have? _____



15. Which star has the lowest chance of being selected? Black or white? _____



How much is a basket of fruit and veg?

1. Go to <https://www.woolworths.com.au/shop/browse/fruit-veg>.
2. Look for each item.
3. Check out the sign in front of or above the item that shows you the price.
4. Write down how much each item costs for 1kg



Vegetable	Cost per 1kg
1 kg tomatoes	
1 kg broccoli	
1 kg carrots	
1 kg of my favourite vegetable which is	
Other vegetables	
1 kg of	
1 kg of	
1 kg of	

Fruit	Cost per 1kg
1 kg apples	
1 kg bananas	
1 kg oranges	
1 kg of my favourite fruit which is	
Other fruit	
1 kg of	
1 kg of	
1 kg of	

1. Which fruit or vegetable was the most expensive?

2. Which fruit or vegetable was the cheapest?

3. Which price surprised you and why?

1879 First Greek fish and chip shop



Comino's Oyster Saloon, Lismore. Photo courtesy of Richmond River Historical Society

Athanassio Comino hailed from the Greek island of Kythera and arrived in Sydney in 1873.

Accounts of his enterprise vary. Several newspaper articles have credited him with opening the first fish and chip shop in Australia. However, family accounts tell a different story.

After arriving in Australia as a crew member on a sailing ship, Comino worked in the Balmain colliery. The story goes that he was walking down Sydney's Oxford Street when hunger drew him to a fish and chip shop operated by an unnamed Welshman. He saw the opportunity to start a business and, in 1878, started his own operation in Oxford Street.

This account has a certain credibility, as fish and chips had become popular in [Britain](#) in the 1860s. Fried fish was introduced in the 17th century by Spanish and Portuguese Jews fleeing persecution in their homelands, while chips most likely originated in Belgium. Charles Dickens talks in *Oliver Twist* (1839) of a "fried fish warehouse", although the fish was perhaps more commonly sold by street vendors. Dickens was also one of the first to mention "chips" of fried potatoes.

The first to open a business selling them together was probably a Portuguese Jew called Joseph Malin, who opened a fish and chip shop in London's East End around 1860. (However, this is also open to question – some say Malin's shop was opened in 1865 and he was pre-empted by a Lancashire entrepreneur, John Lees, in 1863.)

What is clear is that Comino's venture became successful. As well as the fish and chips, he profited from Australians' appetite for oysters, expanding his business into a chain of oyster saloons and owning oyster leases. His brother Ioannis (John) migrated to Australia in 1884 to join him and, after Athanassio's death in 1897, continued to expand the Cominos' "empire". Many family members followed the brothers to Australia and into the seafood business. John became known as the "oyster king" and the Comino name was attached to businesses throughout [New South Wales](#) and Queensland.

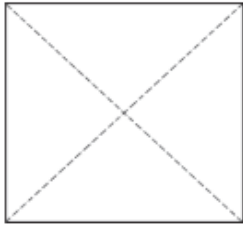
Greek oyster saloons and fish shops evolved into the Greek cafés that became social hubs for many a country town or city suburb through the first half of the 20th century.

Squared Numbers

Fortune Teller

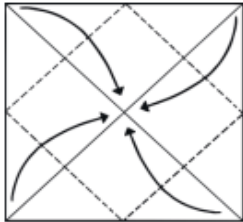
Instructions

①



With pictures facing down, fold on both diagonal lines. Unfold.

②



Fold all four corners to the centre.

③



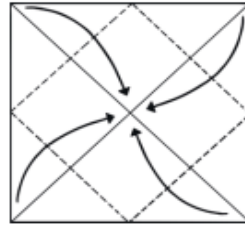
Turn paper over.

⑦



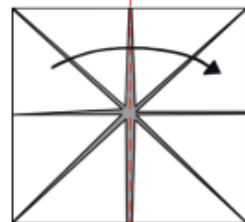
Slide thumbs and forefingers under the squares and move the fortune teller back and forth to play.

④



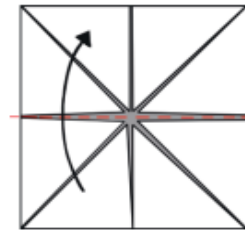
Once again, fold all corners to the centre.

⑤



Fold paper in half and unfold.

⑥



Fold in half from top to bottom. Do not unfold.

1907 Peters Ice Cream founded



[Peters Ice Cream](#) was founded in Sydney by American migrant [Fred Peters](#). His first Peters Ice Cream family bricks, reputed to be made to his mother's recipe, were sold from a horse and cart in the suburb of Manly. In 1927, Peters' Victorian factory opened in Melbourne. The slogan "The health food of a nation" lasted into the 1970s when regulations about health claims forced a change. The brand was sold in 2014 to UK-based R&R Ice Cream, which has now partnered with Nestle to form the world's largest ice cream company, [Froneri](#).

After several unsuccessful business ventures in Australia, Fred Peters began to manufacture Peters Ice Cream in his backyard in Manly. He set up Peters' American Delicacy Co. Ltd in 1907 and subsequently expanded operations to two hired freezer rooms in Paddington. In 1911, he opened his first major factory at Redfern. At that time, it was the world's largest ice cream factory.

Peters then expanded into Queensland, amalgamating in 1927 with Arctic Ice Creams Pty. Ltd., a company set up in 1923 to produce and market the new ice cream sensation Eskimo Pie. The Queensland entity, named Peters Arctic Delicacy Company, opened a new factory in Townsville in 1929. In that year, new companies were also created in Victoria and Western Australia.

Although Fred Peters was a shareholder in each of the companies, the different state entities operated independently and not always harmoniously. Fred Peters retired as managing director of Peters in 1936 and died in 1937. After his death, the divisions between the companies deepened, although the Peters brand remained strong.

In 1960, Peters in Queensland became part of Queensland United Foods. Competition between QUF and Petersville saw the Victorian company marketing its products in Queensland, for a time, under the brand name Penguin. In the 1980s, QUF and Petersville severed all ties with the Western Australian operation.

In Victoria, Peters Ice Cream was advertised for many years by a duo of clowns known as Zig and Zag. They appeared in a children's variety show known as *Peters Fun Fair*. A [rollicking jingle](#) invited kids to "come along and have a Peters Ice Cream". The Zig and Zag partnership ended badly when Zig (aka Jack Perry) was convicted of indecent assault on his granddaughter.

The Peters Ice Cream operation has [changed hands repeatedly](#) since the mid-1980s, having been successively owned by the Adelaide Steamship Company, Pacific Dunlop, Nestlé, Pacific Equity Partners R & R Ice Cream and, now, Froneri. A separate Peters Ice Cream business in Western Australia was bought by Fonterra in 2006 and then Nestlé in 2009. Nestlé continued to own some ice cream brands, such as Drumstick and Skinny Cow, which Peters manufactured under licence.

Wednesday

1. $78 - 9 =$ _____

2. $86 + 71 =$ _____

3. $76 + 3 =$ _____

4. $4 \times 3 =$ _____

5. $16 \div 8 =$ _____

6. 5533 is an even number. True or false? _____

7. Complete this counting pattern:

31, 37, 43, 49, _____, _____, _____

8. What is the sum of 8, 9 and 1? _____

9. Divide 48 by 4. _____

10. $\$1.00 + 50 \text{ cents} + 20 \text{ cents} =$ _____

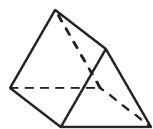
11. $5 \text{ cents} + \$1.00 + \$2.00 =$ _____

12. How many hours from 7 am to 11 pm? _____

13. What digital time does the clock show?



14. A triangular-based prism has _____ corners.



15. Which star has the highest chance of being selected? Black or white? _____



Thursday

1. $20 + 76 =$ _____

2. $50 - 5 =$ _____

3. $53 - 8 =$ _____

4. $3 \times 9 =$ _____

5. $36 \div 3 =$ _____

6. Write the largest number you can using: 4, 1, 2, 2.

7. Complete this counting pattern:

62, 66, 70, 74, _____, _____, _____

8. What is the sum of 6, 3 and 5? _____

9. Share 15 apples between 5 children. _____

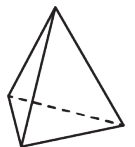
10. $\$1.00 + 20 \text{ cents} + \$2.00 =$ _____

11. $10 \text{ cents} + \$2.00 + 5 \text{ cents} =$ _____

12. How many hours is 420 minutes? _____

13. How many days are in October? _____

14. How many faces does a triangle-based pyramid have? _____



15. Which circle has the lowest chance of being selected? Black or white? _____



Compass points

Study the map before answering the questions below.



- | | |
|---|--|
| a Which state is east of the Northern Territory? _____ | f Which city can you find west of Eyre? _____ |
| b Which state is west of the Northern Territory? _____ | g What landmark is south of Darwin? _____ |
| c Which capital city (in Qld) is north-east of Adelaide? _____ | h Name a city south-west of Sydney. _____ |
| d Which capital city is north of Uluru? _____ | i Which city is south-east of Whyalla? _____ |
| e Which city is north-east of Wyndham? _____ | j What direction is Adelaide from Hobart? _____ |

Extension: Create a treasure hunt around your house. Give 5-6 directions using compass points (N, NE, E, SE, S, SW, W, and NW).

Skydive into Forces

Name: _____
Date: _____

Student worksheet

Directions: Complete the steps below to prepare for the experiment.

1. Draw a falling skydiver.

Falling without parachute	Checklist: <input type="checkbox"/> Draw the skydiver falling. <input type="checkbox"/> Draw why the skydiver falls. <i>(Hint: What causes the pull?)</i> <input type="checkbox"/> Draw how fast the skydiver moves.
----------------------------------	---

Skydive into Forces — Page 2

Name: _____

2. Draw and describe how and why you predict the parachute allows a skydiver to land softly.

Falling with parachute	Checklist: <input type="checkbox"/> Draw the skydiver falling and the parachute. <input type="checkbox"/> Draw why the skydiver falls. <i>(Hint: What generates the pull?)</i> <input type="checkbox"/> Draw how fast the skydiver moves.
Briefly explain why you think a parachute allows for a softer landing.	

Directions: Watch the video and create and test a model parachute.

Directions: Complete the sections below about your experiment.

4. Record if your figure lands soft, hard, or in-between (medium) by circling the correct word in Table 1.

Table 1: Data of how the figure lands.				
	Trial 1	Trial 2	Trial 3	Trial 4
Drop with parachute	Soft Medium Hard	Soft Medium Hard	Soft Medium Hard	Soft Medium Hard
Drop without parachute	Soft Medium Hard	Soft Medium Hard	Soft Medium Hard	Soft Medium Hard

5. Can you see a pattern in your data? What can you conclude?

6. Now that you have done the experiment, use the next page to draw and describe how and why you think the parachute allows a skydiver to land softly. Has your explanation changed?

Falling with parachute

Checklist:

- ☐ Draw the skydiver falling and the parachute.
- ☐ Draw why the skydiver falls.
- ☐ Draw how fast the skydiver moves.
- ☐ Draw what slows down the fall.

Briefly explain why you think a parachute slows a fall down and thus, allows for a safe landing.

2020 Fast food consumption rises during pandemic



In May 2021, the research company [Roy Morgan](#) reported that during 2020, more than 75% of Australians ate take-away food in a given four-week period. This percentage rose significantly from 63.7% the previous year. The fast food outlets included the big chains as well as local fish and chip shops, pizza stores and convenience stores. Fast food consumption was highest among Millennials (those aged 30-45) and Generation Z (15-30 year-olds).

According to the CEO of Roy Morgan, Michael Levine:

“The latest Roy Morgan data shows over three-quarters of Australians aged 14+, 15.9 million, ate take away food from fast food outlets in an average four weeks during 2020, up from 13.3 million (63.7%) in 2019 before anyone had heard of COVID-19.

“This represents significant growth on a year earlier but the trend of increasing patronage at fast food outlets has been consistent over the last few years. The impact of COVID-19 and keeping people at home for extended periods last year led to increasing usage of food-ordering services such as Uber Eats, Menulog, HelloFresh, Deliveroo and DoorDash.

“However, although these apps are ‘popular’ they are not the whole story as customer growth at leading fast food outlets such as McDonald’s, KFC, Hungry Jack’s and Domino’s Pizza has been consistent over the last few years.

The survey showed that burgers outrank pizza as the favourite fast food. McDonald’s and Hungry Jacks combined accounted for 12,325,000 fast food customers, while Domino’s and Pizza Hut together served 5,164,000. Macca’s is still leads the field, followed by KFC, Hungry Jacks and Domino’s. Subway is next, with the rest of the top ten comprising (in descending order) Red Rooster, Nando’s, Grill’d, Guzman y Gomez and Pizza Hut.

Despite the growth in fast food consumption reported by Roy Morgan, [Ibis World](#) expected the fast food market to decline slightly in 2021. However, over the past five years, it had out-performed other business types in the accommodation and food service sectors. Pundits were [identifying trends](#) in the sector including the move to plant-based foods and meat substitutes, an increasing focus on home delivery and more emphasis on social responsibility.

People Rely on the Natural Environment to survive

Watch the video: **Survivor**.



1. Write down all the things the people playing the Survivor game collected for survival.

2. One important thing that people need to survive was missing from the video. What was it? _____

3. What other things might the players be able to find on the island to help them in the game?

4. Match the plants with their uses for the people.



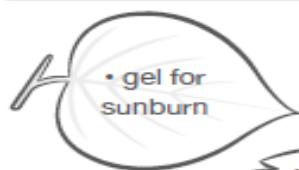
apple tree



wheat




aloe vera



• gel for sunburn



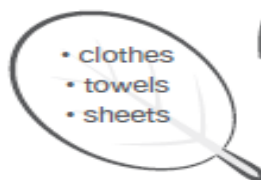
• timber
• firewood
• paper



• olives
• cooking oil
• soap



• flour
• bread
• pasta



• clothes
• towels
• sheets



• fruit
• juice



cotton bush



olive tree



balsa trees

The Case of the Missing Poodle

"Please Inspector, you must help me!" "What seems to be the problem, Mrs. Lawson?" Inspector Ambrose replied as he hung up his dripping raincoat.

"It's my precious Pricilla, the love of my life! She is missing!"

"Your daughter?"

"No, my poodle! She has been dog-napped."

"Are you sure? Perhaps she has just gone out for a walk or has gotten lost."

"No, no, it cannot be. My darling Pricilla would never run away from me. And before Lawson pulled a small, pink dog leash from her bag. The end of the leash was missing and had clearly been cut.

Inspector Ambrose examined the leash. "You may be right," he said thoughtfully. "When did this happen?"

"Just now, not 20 minutes ago! Pricilla and I were on our morning walk when we ran into my friend, Sarah Wellington. We stopped to chat, of course. Sarah was showing me her new hat. She said it cost an arm and a leg, but it's simply adorable! We were only talking for a few minutes, but when I looked down, my sweet Pricilla was gone!"

"An interesting story, Mrs. Lawson," Inspector Ambrose replied. "But not one I am inclined to believe."



Comprehension Questions

1. What genre is this passage? a) mystery b) historical fiction c) biography d) contemporary fiction

2. How is each character important to the story?

Inspector Ambrose: _____

Mrs. Lawson: _____

Pricilla: _____

Sarah Wellington: _____

3. What "costs an arm and a leg"? _____

What does this idiom mean?

4. Why doesn't Inspector Ambrose believe Mrs. Lawson? _____

Arcimboldo Inspired Fruit and Vegetable Faces

Study the painting 'Vertumnus' by Giuseppe Arcimboldo .

Plan your own Arcimboldo inspired fruit and vegetable face using the checklist and space below.



Artist: Giuseppe Arcimboldo

Dimensions: 70cm x57cm

Created: 1590-1591

Medium: Oil paint

Subject: Rudolf II, Holy Roman Emperor, Vertumnus

In your Arcimboldo inspired fruits and vegetables face, what will you use for the...?

Neck	
Hair	
Ears	
Eyes	
Mouth	

Friday

1. $17 - 7 =$ _____

2. $75 + 85 =$ _____

3. $26 - 5 =$ _____

4. $36 \div 9 =$ _____

5. $11 \times 9 =$ _____

6. Write these numbers in descending order: 2389, 6387, 1084, 8166, 8890, 5454.

7. Complete this counting pattern:

21, 31, 41, 51, _____, _____, _____

8. What is the sum of 2, 3 and 8? _____

9. Share \$12 between 6 children. _____

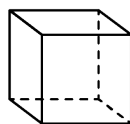
10. 50 cents + 10 cents + 20 cents = _____

11. \$2.00 + 20 cents + \$1.00 = _____

12. 420 minutes = _____ hours

13. 144 hours = _____ days

14. How many faces does a cube have?



15. Which star has the highest chance of being selected? Black or white? _____



Squared Numbers

Fortune Teller

